



Spatial Awareness Exercise

Instructions: Please complete as many questions as you can in 10 minutes and indicate your chosen answer by ticking the letter. Do not worry if you do not answer every question.


01. Which of the cubes below could be made from the pattern shown on the left?



A



B

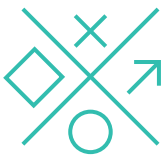


C



D

02. Which of the patterns shown below is a rotation of the pattern shown on the left?



A



B



C

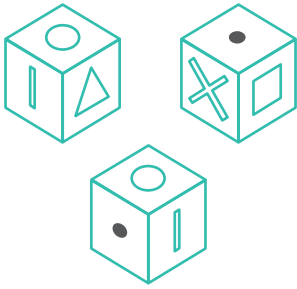


D

None of these

E

03. The diagram on the left shows three views of the same cube. Which of the shapes below is on the face of the cube that is opposite the black spot?




A



B



C



D



E

04. Which of the patterns shown below is a rotation of the pattern shown on the left?



A



B



C

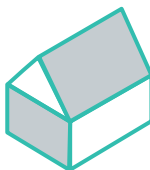
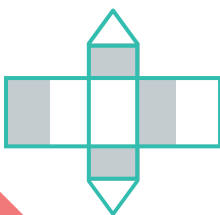


D

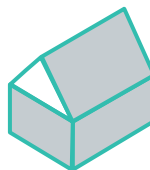
None of these

E

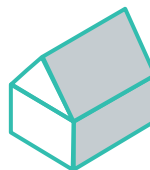
05. Which of the objects below could be made from the pattern shown on the left?



A



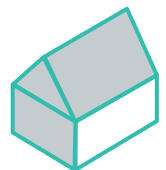
B



C



D



E